

Counting backwards



- 1 Complete the tables by writing the number or drawing the counters to show counting backwards.

a

Number	7			4	
Counters					

b

Number	4		2		0
Counters					

c

Number	9			6	
Counters					

Counting backwards



1 Count backwards from 5.

5	4		2		0
---	---	--	---	--	---

2 Count backwards from 9.

9		7	6	5	
---	--	---	---	---	--

3 Count backwards from 7.

7			4		2
---	--	--	---	--	---

4 Count backwards from 6.

6		4			1
---	--	---	--	--	---

5 Count backwards from 8.

8			5	4	
---	--	--	---	---	--

6 Count backwards from 10.

10		8		6	
----	--	---	--	---	--

7 Count backwards from 10.

10		8		6	5			2		0
----	--	---	--	---	---	--	--	---	--	---

Counting backwards



1 Complete the tables by counting backwards.

a

Number	7	6		4	
Word	seven		five		
Counters					

b

Number	4				0
Word			two	one	
Counters					

c

Number		8		6	
Word	nine		seven		
Counters					

Counting backwards



1 Count backwards from 5.

5			2		0
---	--	--	---	--	---

2 Count backwards from nine.

nine		seven		five	
------	--	-------	--	------	--

3 Count backwards from 7.

7			4		
---	--	--	---	--	--

4 Count backwards from six.

six		four			one
-----	--	------	--	--	-----

5 Count backwards from eight.

eight			five	four	
-------	--	--	------	------	--

6 Count backwards from 10.

10				6	
----	--	--	--	---	--

7 Count backwards from 10.

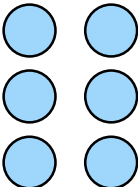
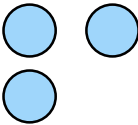
10				6				2		0
----	--	--	--	---	--	--	--	---	--	---

Counting backwards

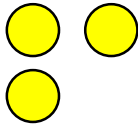


1 Complete the tables by counting backwards.


a

Number	7			4	
Word			five		
Counters					

b

Number	4				0
Word			two		
Counters					

c

Number			7		
Word	nine				
Counters					

Counting backwards



1 Count backwards from 5.

5			2		0
---	--	--	---	--	---

2 Count backwards from nine.

nine		seven			
------	--	-------	--	--	--

3 Count backwards from 7.

7			4		
---	--	--	---	--	--

4 Count backwards from six.

six				two	
-----	--	--	--	-----	--

5 Count backwards from eight.

eight					
-------	--	--	--	--	--

6 Count backwards from 10.

10					
----	--	--	--	--	--

7 Count backwards from 10.

10						4				
----	--	--	--	--	--	---	--	--	--	--

Counting backwards



1 Spot the mistake in each of the sequences below.

a Ten nine seven six five four

b 6 5 4 2 1 0

c Eight six five four three two

d 7 6 5 3 2 1

e Six five four two one zero

Rewrite the number tracks above correcting the mistakes.

a

--	--	--	--	--	--	--

b

--	--	--	--	--	--	--

c

--	--	--	--	--	--	--

d

--	--	--	--	--	--	--

e

--	--	--	--	--	--	--

Answers

To avoid wasting paper & ink,
please do not print this page.



Counting backwards



- 1 Complete the tables by writing the number or drawing the counters to show counting backwards.

a

Number	7	6	5	4	3
Counters				4 counters drawn.	

b

Number	4	3	2	1	0
Counters			2 counters drawn.		0 counters drawn.

c

Number	9	8	7	6	5
Counters	9 counters drawn.			6 counters drawn.	

Counting backwards



1 Count backwards from 5.

5	4	3	2	1	0
---	---	---	---	---	---

2 Count backwards from 9.

9	8	7	6	5	4
---	---	---	---	---	---

3 Count backwards from 7.

7	6	5	4	3	2
---	---	---	---	---	---

4 Count backwards from 6.

6	5	4	3	2	1
---	---	---	---	---	---

5 Count backwards from 8.

8	7	6	5	4	3
---	---	---	---	---	---

6 Count backwards from 10.

10	9	8	7	6	5
----	---	---	---	---	---

7 Count backwards from 10.

10	9	8	7	6	5	4	3	2	1	0
----	---	---	---	---	---	---	---	---	---	---

Counting backwards



1 Complete the tables by counting backwards.

a

Number	7	6	5	4	3
Word	seven	six	five	four	three
Counters			5 counters drawn.	4 counters drawn.	

b

Number	4	3	2	1	0
Word	four	three	two	one	zero
Counters	4 counters drawn.		2 counters drawn.		0 counters drawn.

c

Number	9	8	7	6	5
Word	nine	eight	seven	six	five
Counters	9 counters drawn.	8 counters drawn.		6 counters drawn.	

Counting backwards



1 Count backwards from 5.

5	4	3	2	1	0
---	---	---	---	---	---

2 Count backwards from nine.

nine	eight	seven	six	five	four
------	-------	-------	-----	------	------

3 Count backwards from 7.

7	6	5	4	3	2
---	---	---	---	---	---

4 Count backwards from six.

six	five	four	three	two	one
-----	------	------	-------	-----	-----

5 Count backwards from eight.

eight	seven	six	five	four	three
-------	-------	-----	------	------	-------

6 Count backwards from 10.

10	9	8	7	6	5
----	---	---	---	---	---

7 Count backwards from 10.

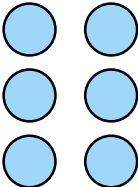
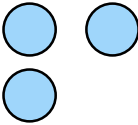
10	9	8	7	6	5	4	3	2	1	0
----	---	---	---	---	---	---	---	---	---	---

Counting backwards

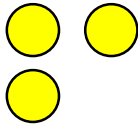


1 Complete the tables by counting backwards.

a

Number	7	6	5	4	3
Word	seven	six	five	four	three
Counters	7 counters drawn.		5 counters drawn.	4 counters drawn.	

b

Number	4	3	2	1	0
Word	four	three	two	one	zero
Counters	4 counters drawn.		2 counters drawn.	1 counters drawn.	0 counters drawn.

c

Number	9	8	7	6	5
Word	nine	eight	seven	six	five
Counters	9 counters drawn.	8 counters drawn.	7 counters drawn.	6 counters drawn.	

Counting backwards



1 Count backwards from 5.

5	4	3	2	1	0
---	---	---	---	---	---

2 Count backwards from nine.

nine	eight	seven	six	five	four
------	-------	-------	-----	------	------

3 Count backwards from 7.

7	6	5	4	3	2
---	---	---	---	---	---

4 Count backwards from six.

six	five	four	three	two	one
-----	------	------	-------	-----	-----

5 Count backwards from eight.

eight	seven	six	five	four	three
-------	-------	-----	------	------	-------

6 Count backwards from 10.

10	9	8	7	6	5
----	---	---	---	---	---

7 Count backwards from 10.

10	9	8	7	6	5	4	3	2	1	0
----	---	---	---	---	---	---	---	---	---	---

Counting backwards



1 Spot the mistake in each of the sequences below.

a Ten nine seven six five four

b 6 5 4 2 1 0

c Eight six five four three two

d 7 6 5 3 2 1

e Six five four two one zero

Rewrite the number tracks above correcting the mistakes.

a

ten	nine	eight	seven	six	five	four
-----	------	-------	-------	-----	------	------

b

6	5	4	3	2	1	0
---	---	---	---	---	---	---

c

eight	seven	six	five	four	three	two
-------	-------	-----	------	------	-------	-----

d

7	6	5	4	3	2	1
---	---	---	---	---	---	---

e

six	five	four	three	two	one	zero
-----	------	------	-------	-----	-----	------