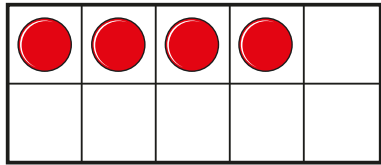


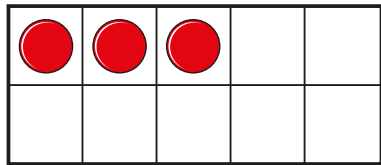


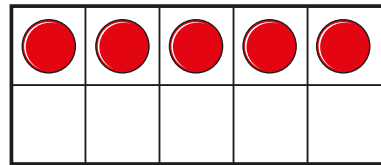
Count one less

1 Here is 4

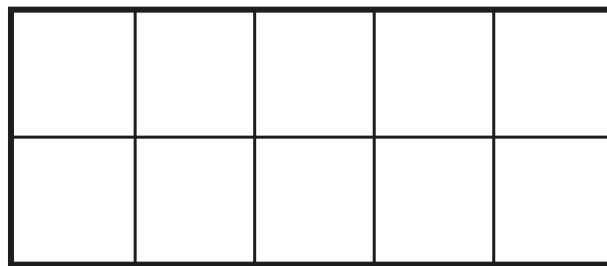


Tick one less than 4

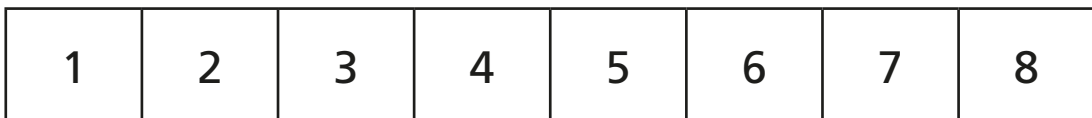





2 Draw one less than 7



3 a) Circle one less than 5



b) Circle one less than 6



4 Write the missing numbers.

a) One less than three is

b) One less than 7 is

c) One less than 9 is

d) One less than 1 is

5 Write the missing numbers.

a) One less than is 5

a) One less than is 9

c) One less than is zero.

6 Ron makes a shape with cubes.

Dora wants to make a shape. She has one less cube.

What shapes can Dora make?

